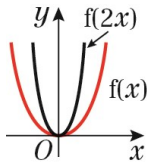


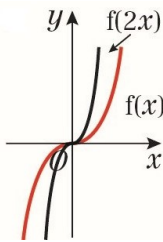
Exercise 4E

1 a $f(2x)$ is a stretch with scale factor $\frac{1}{2}$ in the x -direction.

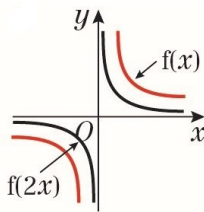
i $f(x) = x^2$, $f(2x) = (2x)^2 = 4x^2$



ii $f(x) = x^3$, $f(2x) = (2x)^3 = 8x^3$

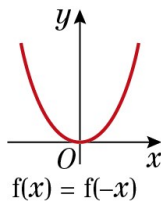


iii $f(x) = \frac{1}{x}$, $f(2x) = \frac{1}{2x}$

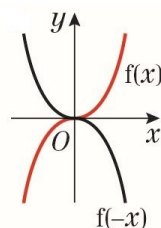


b $f(-x)$ is a reflection in the y -axis (or stretch with scale factor -1 in the x -direction).

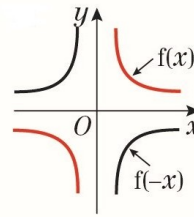
i $f(x) = x^2$, $f(-x) = (-x)^2 = x^2$



ii $f(x) = x^3$, $f(-x) = (-x)^3 = -x^3$

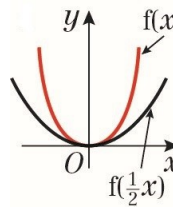


b iii $f(x) = \frac{1}{x}$, $f(-x) = \frac{1}{-x} = -\frac{1}{x}$

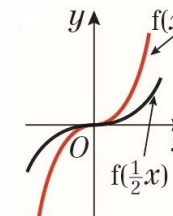


c $f(\frac{1}{2}x)$ is a stretch with scale factor 2 in the x -direction.

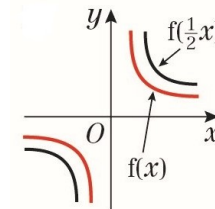
i $f(x) = x^2$, $f(\frac{1}{2}x) = (\frac{1}{2}x)^2 = \frac{x^2}{4}$



ii $f(x) = x^3$, $f(\frac{1}{2}x) = (\frac{1}{2}x)^3 = \frac{x^3}{8}$

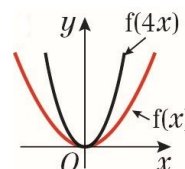


iii $f(x) = \frac{1}{x}$, $f(\frac{1}{2}x) = \frac{1}{\frac{1}{2}x} = \frac{2}{x}$

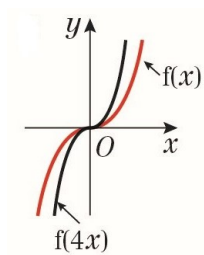


d $f(4x)$ is a stretch with scale factor $\frac{1}{4}$ in the x -direction.

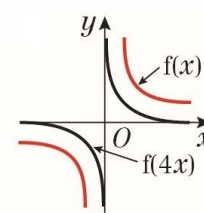
i $f(x) = x^2$, $f(4x) = (4x)^2 = 16x^2$



1 d ii $f(x) = x^3$, $f(4x) = (4x)^3 = 64x^3$

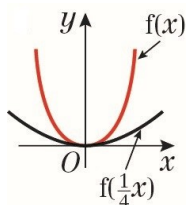


iii $f(x) = \frac{1}{x}$, $f(4x) = \frac{1}{4x}$

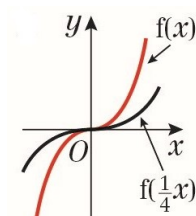


e $f(\frac{1}{4}x)$ is a stretch with scale factor 4 in the x -direction.

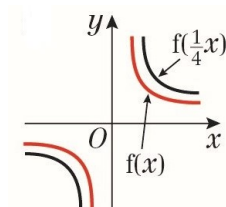
i $f(x) = x^2$, $f(\frac{1}{4}x) = (\frac{1}{4}x)^2 = \frac{x^2}{16}$



ii $f(x) = x^3$, $f(\frac{1}{4}x) = (\frac{1}{4}x)^3 = \frac{x^3}{64}$

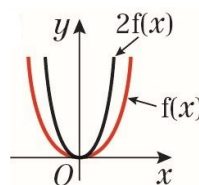


iii $f(x) = \frac{1}{4}$, $f(\frac{1}{4}x) = \frac{1}{\frac{1}{4}x} = \frac{4}{x}$

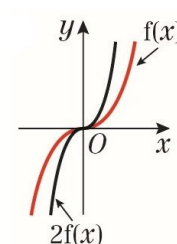


f $2f(x)$ is a stretch with scale factor 2 in the y -direction.

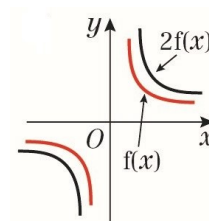
i $f(x) = x^2$, $2f(x) = 2x^2$



ii $f(x) = x^3$, $2f(x) = 2x^3$

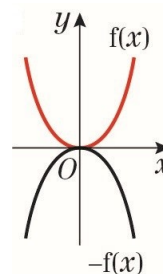


iii $f(x) = \frac{1}{x}$, $2f(x) = 2 \times \frac{1}{x} = \frac{2}{x}$

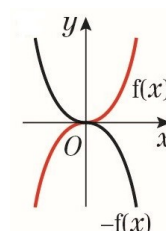


g $-f(x)$ is a reflection in the x -axis (or stretch with scale factor -1 in the y -direction).

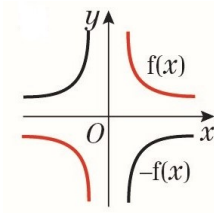
i $f(x) = x^2$, $-f(x) = -x^2$



ii $f(x) = x^3$, $-f(x) = -x^3$

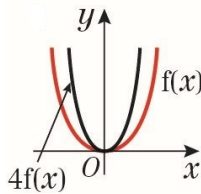


1 g iii $f(x) = \frac{1}{x}$, $-f(x) = -\frac{1}{x}$

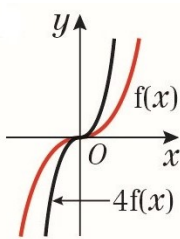


h $4f(x)$ is a stretch with scale factor 4 in the y -direction.

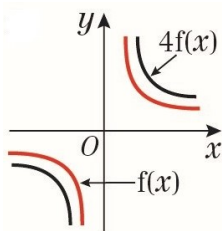
i $f(x) = x^2$, $4f(x) \rightarrow y = 4x^2$



ii $f(x) = x^3$, $4f(x) = 4x^3$

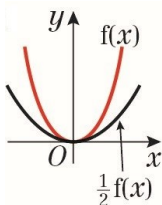


iii $f(x) = \frac{1}{x}$, $4f(x) = 4 \times \frac{1}{x} = \frac{4}{x}$

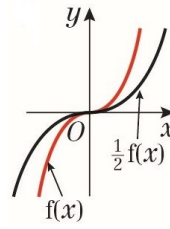


i i $\frac{1}{2}f(x)$ is a stretch with scale factor $\frac{1}{2}$ in the y -direction.

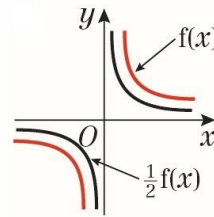
$f(x) = x^2$, $\frac{1}{2}f(x) = \frac{1}{2}x^2$



i ii $f(x) = x^3$, $\frac{1}{2}f(x) = \frac{1}{2}x^3$

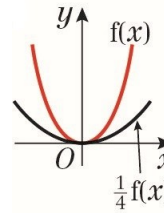


iii $f(x) = \frac{1}{x}$, $\frac{1}{2}f(x) = \frac{1}{2x}$

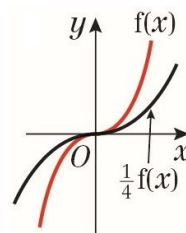


j i $\frac{1}{4}f(x)$ is a stretch with scale factor $\frac{1}{4}$ in the y -direction.

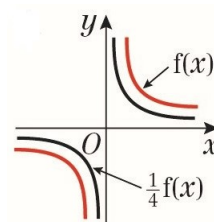
$f(x) = x^2$, $\frac{1}{4}f(x) = \frac{1}{4}x^2$



ii $f(x) = x^3$, $\frac{1}{4}f(x) = \frac{1}{4}x^3$



iii $f(x) = \frac{1}{x}$, $\frac{1}{4}f(x) = \frac{1}{4x}$



2 a $y = x^2 - 4$
 $= (x - 2)(x + 2)$

As $a = 1$ is positive, the graph has a \cup shape and a minimum point.

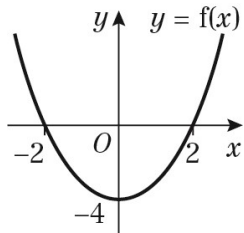
$$0 = (x - 2)(x + 2)$$

$$\text{So } x = 2 \text{ or } x = -2$$

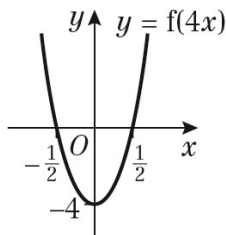
The curve crosses the x -axis at $(2, 0)$ and $(-2, 0)$.

$$\text{When } x = 0, y = (-2) \times 2 = -4$$

The curve crosses the y -axis at $(0, -4)$.



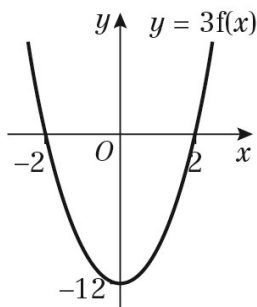
b $f(4x)$ is a stretch with scale factor $\frac{1}{4}$ in the x -direction.



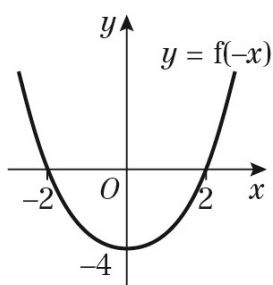
$$\frac{1}{3}y = f(x)$$

$$y = 3f(x)$$

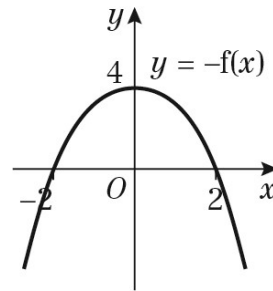
$3f(x)$ is a stretch with scale factor 3 in the y -direction.



$f(-x)$ is a reflection in the y -axis.



2 b $-f(x)$ is a reflection in the x -axis.



3 a $y = (x - 2)(x + 2)x$

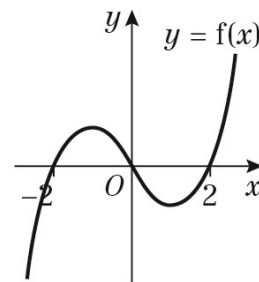
$$0 = (x - 2)(x + 2)x$$

$$\text{So } x = 2, x = -2 \text{ or } x = 0$$

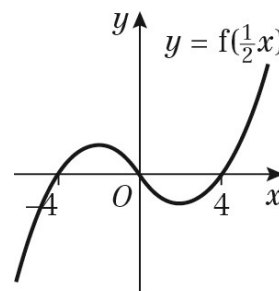
The curve crosses the x -axis at $(2, 0)$, $(-2, 0)$ and $(0, 0)$.

$$x \rightarrow \infty, y \rightarrow \infty$$

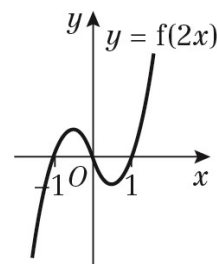
$$x \rightarrow -\infty, y \rightarrow -\infty$$



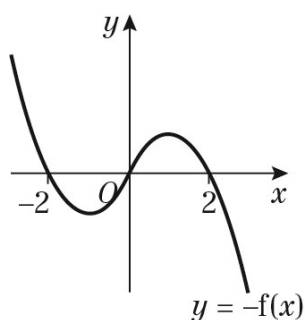
b $f(\frac{1}{2}x)$ is a stretch with scale factor 2 in the x -direction.



$f(2x)$ is a stretch with scale factor $\frac{1}{2}$ in the x -direction.



- 3 b $-f(x)$ is a reflection in the x -axis.



- 4 a $y = x^2(x - 3)$

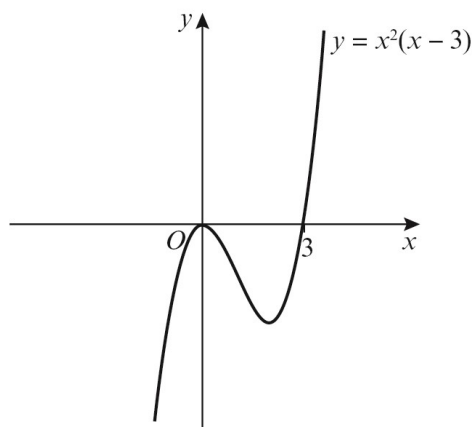
$$0 = x^2(x - 3)$$

$$\text{So } x = 0 \text{ or } x = 3$$

The curve touches the x -axis at $(0, 0)$ and crosses it at $(3, 0)$.

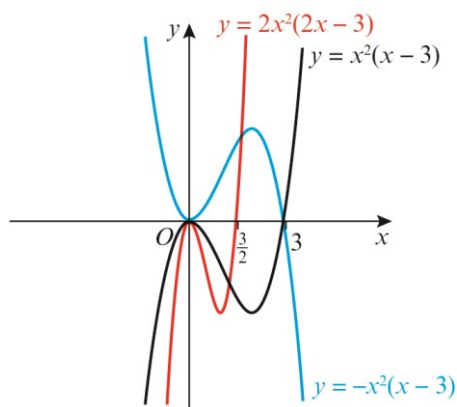
$$x \rightarrow \infty, y \rightarrow \infty$$

$$x \rightarrow -\infty, y \rightarrow -\infty$$



- b i $f(x) = x^2(x - 3)$, so $y = (2x)^2(2x - 3)$ is $f(2x)$, which is a stretch with scale factor $\frac{1}{2}$ in the x -direction.

- ii $y = -x^2(x - 3)$ is $-f(x)$, which is a reflection in the x -axis.



- 5 a $y = x^2 + 3x - 4$

$$= (x + 4)(x - 1)$$

As $a = 1$ is positive, the graph has a \cup shape and a minimum point.

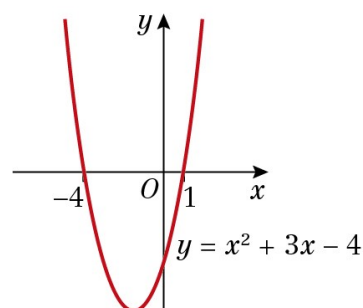
$$0 = (x + 4)(x - 1)$$

$$\text{So } x = -4 \text{ or } x = 1$$

The curve crosses the x -axis at $(-4, 0)$ and $(1, 0)$.

$$\text{When } x = 0, y = 4 \times (-1) = -4$$

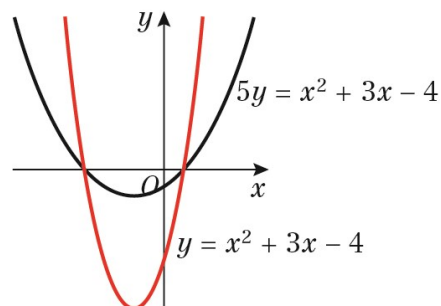
The curve crosses the y -axis at $(0, -4)$.



- b $5y = x^2 + 3x - 4$

$$y = \frac{1}{5}(x^2 + 3x - 4)$$

$f(x) = x^2 + 3x - 4$, so $y = \frac{1}{5}(x^2 + 3x - 4)$ is $\frac{1}{5}f(x)$, which is a stretch with scale factor $\frac{1}{5}$ in the y -direction.

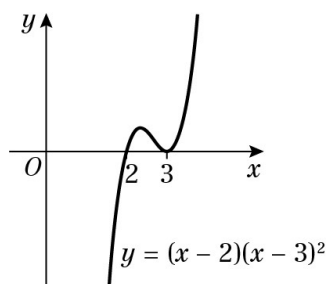


6 a $y = f(2x)$ is a stretch with scale factor $\frac{1}{2}$ in the x -direction, so all x -coordinates are halved.
 $P(2, -3)$ is transformed to the point $(1, -3)$.

b $y = 4f(x)$ is a stretch with scale factor 4 in the y -direction, so all y -coordinates are multiplied by four.
 $P(2, -3)$ is transformed to the point $(2, -12)$.

7 $f(\frac{1}{2}x)$ is a stretch with scale factor 2 in the x -direction, so all x -coordinates are doubled.
 $Q(-2, 8)$ is transformed to the point $(-4, 8)$.

8 a $y = (x - 2)(x - 3)^2$
 $0 = (x - 2)(x - 3)^2$
 So $x = 2$ or $x = 3$
 The curve crosses the x -axis at $(2, 0)$ and touches it at $(3, 0)$.
 When $x = 0$, $y = (-2) \times (-3)^2 = -18$
 $x \rightarrow \infty, y \rightarrow \infty$
 $x \rightarrow -\infty, y \rightarrow -\infty$



b $f(x) = (x - 2)(x - 3)^2$
 $y = (ax - 2)(ax - 3)^2$ is the graph of $y = f(ax)$, which is a stretch with scale factor $\frac{1}{a}$ in the x -direction, so all

x -coordinates are multiplied by $\frac{1}{a}$.

For the point $(2, 0)$ to be transformed to $(1, 0)$, multiply the x -coordinate by $\frac{1}{2}$, giving $a = 2$.

For the point $(3, 0)$ to be transformed to $(1, 0)$, multiply the x -coordinate by $\frac{1}{3}$, giving $a = 2$ or $a = 3$

Challenge

1 $y = \frac{1}{3}f(2x)$ is a stretch with scale factor $\frac{1}{3}$ in the y -direction, so multiply the y -coordinate by $\frac{1}{3}$, and a stretch with scale factor $\frac{1}{2}$ in the x -direction, so multiply the x -coordinate by $\frac{1}{2}$.
 $R(4, -6)$ is transformed to $(2, -2)$.

2 $S(-4, 7)$ is transformed to $S'(-8, 1.75)$. The x -coordinate has doubled, which is a stretch of scale factor 2 in the x -direction. The y -coordinate has been divided by 4, which is a stretch of scale factor $\frac{1}{4}$ in the y -direction.
 The transformation is $y = \frac{1}{4}f(\frac{1}{2}x)$.